

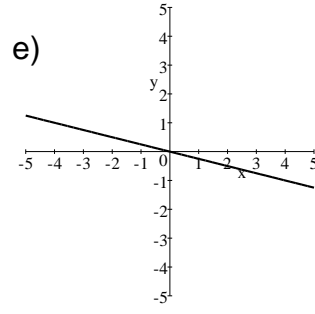
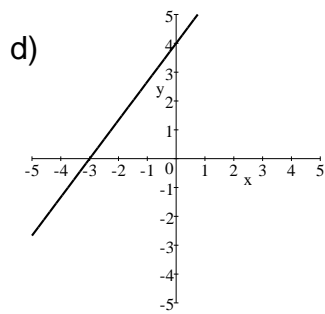
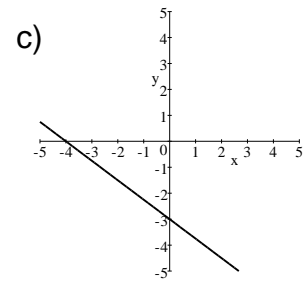
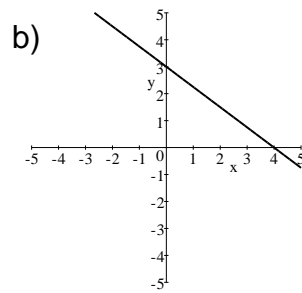
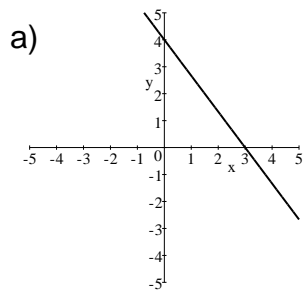
FINAL EXAM REVIEW – MAT1033 (Intermediate Algebra)

1. Factor completely: $3x^2 - 19x - 14$
- a) $(3x + 2)(x - 7)$ b) $(3x - 7)(x + 2)$ c) $(3x - 2)(x + 7)$
d) $(3x + 7)(x - 2)$ e) None of these
2. Factor completely: $2rs + 3rst - 8r - 12rt$
- a) $r(2s + 3st - 8 - 12t)$ b) $(rs - 4r)(2 + 3t)$ c) $r(s - 4)(2 - 3t)$
d) $r(s + 4)(2 - 3t)$ e) $r(s - 4)(2 + 3t)$
3. Factor completely: $2x^3 + 54$
- a) $2(x - 3)(x^2 + 3x - 9)$ b) $2(x^3 + 27)$
c) $2(x + 3)(x + 3)(x + 3)$ d) $2(x + 3)(x^2 - 3x + 9)$ e) Not Factorable
4. Determine the values of x for which $\frac{x-4}{x^2-9}$ is undefined.
- a) 3 b) 3 and -3 c) 4, 3, and -3 d) 0 and 3 e) 0
5. Divide: $\frac{4x-16}{5x+15} \div \frac{4-x}{2x+6}$
- a) 3 b) $-\frac{4(x-4)}{5(x+3)^2}$ c) $-\frac{8}{5}$ d) $\frac{3}{10}$ e) -4
6. Add, then simplify: $\frac{2}{x^2-9} + \frac{5}{x^2-x-12}$
- a) $\frac{7}{(x^2-9)(x^2-x-12)}$ b) $\frac{7x^2-x-21}{(x^2-9)(x^2-x-12)}$ c) $\frac{7x-7}{(x^2-9)(x^2-x-12)}$
d) $\frac{7x-7}{(x-3)(x-4)(x+3)}$ e) $\frac{7x-23}{(x-3)(x-4)(x+3)}$

7. Simplify the complex fraction: $\frac{3+\frac{7}{x}}{\frac{1+\frac{2}{x}}{xy+1}}$
- a) $\frac{3xy+7}{1+2x}$ b) $\frac{3xy+7y}{1+2x}$ c) $\frac{3+7y}{xy+2}$ d) $\frac{3y+7}{1+2x}$ e) $\frac{3xy+7y}{xy+2}$
8. Solve for x : $\frac{4x+1}{4} - \frac{2x+3}{3} = \frac{7}{12}$
- a) {4} b) $\{-\frac{9}{2}\}$ c) {-2} d) $\{\frac{3}{2}\}$ e) None of these
9. What is equivalent to: $27^{-2/3}$
- a) $\sqrt[3]{27^2}$ b) $\frac{1}{\sqrt[3]{27^2}}$ c) $\frac{1}{\sqrt{27^3}}$ d) $\sqrt{27^3}$ e) $-\sqrt[3]{27^2}$
10. Find: $\sqrt{8} + \sqrt{18}$
- a) $\sqrt{24}$ b) 10 c) $5\sqrt{2}$ d) $2\sqrt{6}$ e) None of these
11. Find: $(\sqrt{6} - 2)(\sqrt{6} + 2)$
- a) 2 b) 4 c) 6 d) 8 e) None of these
12. Rationalize the denominator: $\frac{5}{8-\sqrt{3}}$
- a) 1 b) $8 + \sqrt{3}$ c) $\frac{5(8+\sqrt{3})}{61}$ d) $\frac{5(8-\sqrt{3})}{61}$ e) $8 - \sqrt{3}$
13. Solve for x : $x^2 - 2x = 8$
- a) $\{1 \pm i\sqrt{3}\}$ b) $\{-2, 4\}$ c) $\{1 \pm \sqrt{5}\}$ d) {2} e) {8, 10}

14. Solve for x : $2x^2 + 4x = 9x + 18$
- a) $\{-2, \frac{9}{2}\}$ b) $\{2, -\frac{9}{2}\}$ c) $\{\frac{9}{2}\}$ d) $\{-\frac{9}{2}\}$ e) None of these
15. Solve for x : $8x^4 - 18x^3 - 5x^2 = 0$
- a) $\{-\frac{1}{4}, \frac{5}{2}\}$ b) $\{\frac{1}{4}, -\frac{5}{2}\}$ c) $\{0, \frac{1}{4}, -\frac{5}{2}\}$ d) $\{0, -\frac{1}{4}, \frac{5}{2}\}$ e) $\{0\}$
16. Find the slope of the line determined by the points $(-3, 2)$ and $(5, -5)$
- a) $-\frac{3}{4}$ b) $\frac{3}{4}$ c) $-\frac{5}{6}$ d) $-\frac{7}{2}$ e) $-\frac{7}{8}$
17. Find the slope of a line that is perpendicular to the line $4x + 3y = -6$
- a) $\frac{3}{4}$ b) $\frac{4}{3}$ c) $-\frac{3}{4}$ d) $-\frac{4}{3}$ e) None of these
18. Find the slope of a line that is parallel to the line $2x - 6y = 8$
- a) $\frac{1}{3}$ b) $-\frac{1}{3}$ c) 3 d) -3 e) None of these
19. Determine whether the lines $3x - 2y = 6$ and $2x - 3y = 6$ are parallel, perpendicular or neither.
- a) parallel b) perpendicular c) neither

20. Which of the following is the graph of $3x + 4y = 12$



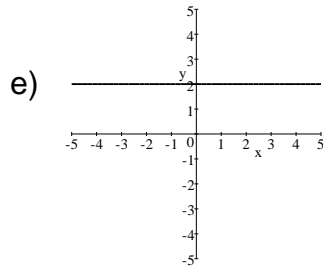
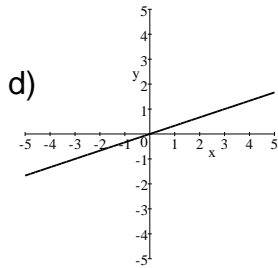
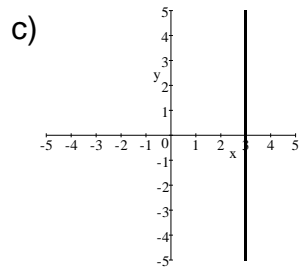
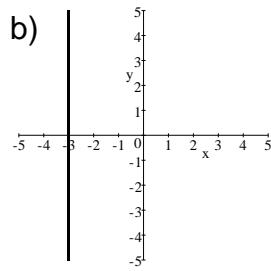
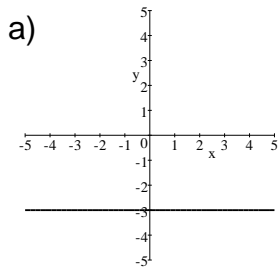
21. Find the x-intercept of $4x - 3y = -12$

- a) -12 b) -4 c) -3 d) 3 e) 12

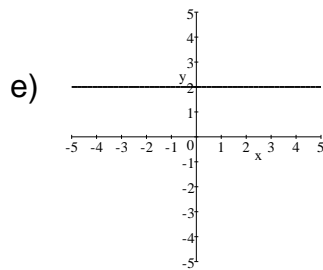
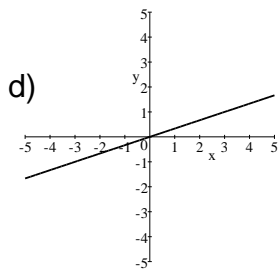
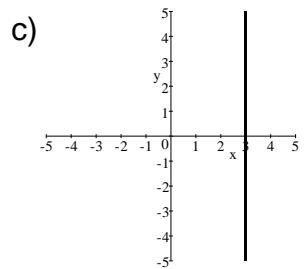
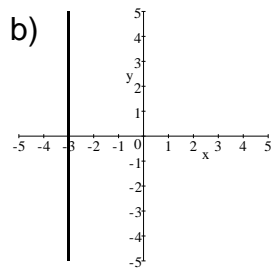
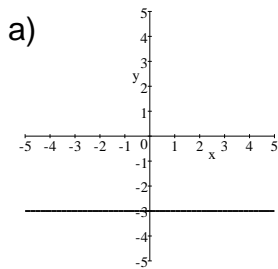
22. Find the y-intercept of $3x + 2y = 6$

- a) -6 b) -4 c) -3 d) 3 e) 6

23. Which of the following is the graph of $x = -3$



24. Which of the following is the graph of $y = -3$



25. Solve for x : $\frac{3}{x^2} + \frac{2}{x} = 1$

a) $\{-1\}$

b) $\{0\}$

c) $\{-3\}$

d) $\{-1, 3\}$

e) $\{4\}$

26. Simplify: $\frac{y^{1/3}y^{2/5}}{y}$
- a) $y^{4/15}$ b) $y^{5/8}$ c) $\frac{1}{y^{5/8}}$ d) $\frac{1}{y^{4/15}}$ e) None of these
27. Solve for x : $(x + 5)^2 = 3$
- a) $\{\sqrt{2}\}$ b) $\{4\}$ c) $\{1 \pm \sqrt{3}\}$ d) $\{-5 \pm \sqrt{3}\}$ e) $\{3 \pm \sqrt{5}\}$
28. Solve the system for y : $\begin{matrix} x + y = -5 \\ -2x + y = 1 \end{matrix}$
- a) $y = -2$ b) $y = -3$ c) $y = 1$ d) $y = 0$ e) $y = -1$
29. A rectangular table top is 2 feet longer than it is wide, and its area is 24 square feet. Write an equation to find the length and the width of the table top and solve. Let x = the width of the table top.
- a) Length = 6 feet
Width = 4 feet b) Length = 8 feet
Width = 6 feet c) Length = 3 feet
Width = 1 feet
- d) Length = 4 feet
Width = 6 feet e) Length = 8 feet
Width = 3 feet
30. What number must be added to $x^2 + 20x$ to form a perfect square trinomial?
- a) 10 b) 400 c) 100 d) 20 e) 40
31. Solve for x : $\frac{x}{x-3} + \frac{4}{x+3} = \frac{18}{x^2-9}$
- a) $\{10, -3\}$ b) $\{-10, 3\}$ c) $\{-3\}$ d) $\{-10\}$ e) \emptyset

32. Simplify: $\frac{4x^2-25y^2}{10y-4x}$
- a) $-\frac{2x+5y}{2}$ b) $-x-5y$ c) $\frac{2x+5y}{2}$ d) $x+5y$ e) $x-\frac{5y}{2}$
33. Solve for x : $x^2+6x=-11$
- a) $\{3 \pm i\sqrt{2}\}$ b) $\{-3 \pm \sqrt{2}\}$ c) $\{-3 \pm i\sqrt{2}\}$ d) $\{3 \pm 2i\sqrt{5}\}$
e) $\{-3 \pm 2\sqrt{5}\}$
34. Solve for x : $5x^2-3x+4=0$
- a) $\left\{\frac{3 \pm \sqrt{71}}{5}\right\}$ b) $\left\{\frac{-3 \pm i\sqrt{71}}{10}\right\}$ c) $\left\{\frac{3 \pm i\sqrt{89}}{5}\right\}$ d) $\left\{\frac{-3 \pm \sqrt{89}}{10}\right\}$ e) $\left\{\frac{3 \pm i\sqrt{71}}{10}\right\}$
35. Simplify: $\sqrt[3]{250x^7y^{14}}$
- a) $2xy^2\sqrt[3]{5x^2y^4}$ b) $5x^3y^7\sqrt[3]{10x}$ c) $5x^4y^{11}\sqrt[3]{2}$ d) $5x^2y^4\sqrt[3]{2xy^2}$
e) None of these
36. Simplify: $\frac{5}{4x^2}-\frac{2}{3x}$
- a) $\frac{15-8x}{12x^2}$ b) $\frac{13}{3x}$ c) $\frac{3}{x}$ d) $\frac{5-2x}{x^2}$ e) $\frac{3}{34-3x}$
37. Simplify: $\frac{7x-4}{x-3}-\frac{13-3x}{x-3}$
- a) $4x-17$ b) $\frac{10x-17}{x-3}$ c) $\frac{4x-17}{x-3}$ d) $10x-9$ e) $\frac{10x-9}{x-3}$

38. Simplify: $3\sqrt{54} + 2\sqrt{24}$

- a) $13\sqrt{6}$ b) $5\sqrt{78}$ c) $35\sqrt{6}$ d) $30\sqrt{5}$ e) None of these

39. Rationalize the denominator: $\frac{6}{5\sqrt{3}}$

- a) $\frac{\sqrt{3}}{10}$ b) $\frac{\sqrt{3}}{15}$ c) $30\sqrt{3}$ d) $\frac{2}{5}$ e) $\frac{2\sqrt{3}}{5}$

40. Simplify: $(x^4 \cdot x^3)^{3/2}$

- a) $x^{21/2}$ b) x^{18} c) $x^{17/2}$ d) $2x^{21/2}$ e) $2x^{17/2}$

41. Write the equation of the line passing through the point $(-3, -2)$ with slope $\frac{3}{4}$

- a) $3x - 4y = -1$ b) $3x + 4y = 17$ c) $4x - 3y = 7$ d) $2x + 3y = -1$
e) $2x - 4y = 9$

42. Solve: $(x - 7)^2 = -9$

- a) $\{4, 10\}$ b) $\{7 \pm 3i\}$ c) $\{-4, -10\}$ d) $\{7 \pm i\sqrt{3}\}$
e) $\{-7 \pm 3i\}$

43. Solve: $x^2 = 64$

- a) $\{8, -8\}$ b) $\{4, -4\}$ c) $\{0, 8\}$ d) $\{8\}$ e) $\{4\}$

44. Solve: $x^2 = 16x$

- a) {16} b) {4} c) {0} d) {0,16} e) {4,-4}

45. Choose the system of equations that would be used to solve the following problem.

A family Arts Center charges \$10 per ticket for adults and \$7 per ticket for children for its performances. In the last performance, a total of 70 tickets was purchased at a total cost of \$571. How many of the tickets sold were for children?

x = The number of adult tickets sold
 y = The number of children tickets sold

- a) $x + y = 70$
 $10x + 7y = 571$ b) $x + y = 571$
 $10x + 7y = 70$ c) $x + y = 70$
 $7x + 10y = 571$
d) $x + y = 571$
 $7x + 10y = 70$ e) None of these

MAT1033 FINAL REVIEW ANSWERS

1. A	11. A	21. C	31. D	41. A
2. E	12. C	22. D	32. A	42. B
3. D	13. B	23. B	33. C	43. A
4. B	14. A	24. A	34. E	44. D
5. C	15. D	25. D	35. D	45. A
6. E	16. E	26. D	36. A	
7. B	17. A	27. D	37. B	
8. A	18. A	28. B	38. A	
9. B	19. C	29. A	39. E	
10. C	20. B	30. C	40. A	